


CANDIDATE
NAME

CENTRE
NUMBER

--	--	--	--	--

CANDIDATE
NUMBER

--	--	--	--



CHEMISTRY

5070/21

Paper 2 Theory

October/November 2015

1 hour 30 minutes

Candidates answer on the Question Paper.

No Additional Materials are required.

READ THESE INSTRUCTIONS FIRST

Write your Centre number, candidate number and name on all the work you hand in.

Write in dark blue or black pen.

You may use an HB pencil for any diagrams or graphs.

Do not use staples, paper clips, glue or correction fluid.

DO NOT WRITE IN ANY BARCODES.

Section A

Answer **all** questions.

Write your answers in the spaces provided in the Question Paper.

Section B

Answer any **three** questions.

Write your answers in the spaces provided in the Question Paper.

Electronic calculators may be used.

You may lose marks if you do not show your working or if you do not use appropriate units.

A copy of the Periodic Table is printed on page 20.

At the end of the examination, fasten all your work securely together.

The number of marks is given in brackets [] at the end of each question or part question.

This document consists of **17** printed pages and **3** blank pages.

Section A

Answer **all** the questions in this section in the spaces provided.

The total mark for this section is 45.

A1 Choose from the following gases to answer the questions below.

ammonia
argon
carbon dioxide
chlorine
ethane
ethene
nitrogen
nitrogen(II) oxide
oxygen
sulfur dioxide

Each of these gases can be used once, more than once or not at all.

Which gas

(a) forms approximately 1% of the air,

.....[1]

(b) bleaches damp litmus paper,

.....[1]

(c) reacts with water to form an alkaline solution,

.....[1]

(d) can undergo polymerisation,

.....[1]

(e) is a compound formed in the atmosphere as a result of lightning activity,

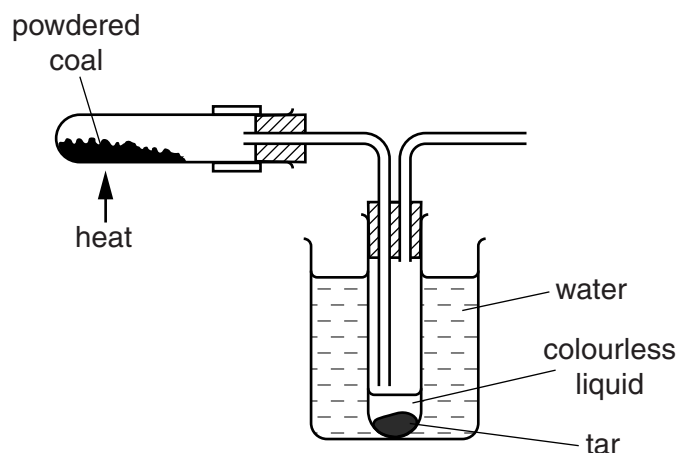
.....[1]

(f) is a diatomic molecule containing a total of 16 electrons?

.....[1]

[Total: 6]

- A2** Coal is a mixture of carbon compounds with a small amount of sulfur.
A sample of coal is heated in the absence of air using the apparatus shown.



The distillate is a mixture of a colourless liquid and tar.

- (a)** The colourless liquid contains ammonia, NH_3 .

Draw a 'dot-and-cross' diagram for ammonia.
Show only the outer shell electrons.

[2]

- (b)** The tar contains ethanoic acid.
When warmed in the presence of sulfuric acid, ethanoic acid reacts with propanol to form an ester.

Name and draw the structure of this ester showing all the atoms and all the bonds.

name.....

structure

[2]

(c) The tar also contains a compound with the following composition.

element	percentage by mass
carbon	76.60
hydrogen	6.38
oxygen	17.02

Deduce the empirical formula of this compound.

empirical formula[2]

(d) When coal is burned, an acidic gas is produced which decolourises acidified aqueous potassium manganate(VII). This gas contributes to acid rain.

(i) Identify this gas and describe how acid rain is formed.

.....

[2]

(ii) Give one adverse effect of acid rain on buildings.

.....[1]

(iii) Acid rain can have an adverse effect on respiration.

Write an equation to represent the process of respiration.

.....[2]

[Total: 11]

A3 A layer of ozone is present in the stratosphere about 30 km above the Earth's surface.

(a) Compounds with formulae such as CCl_3F and C_2ClF_5 are responsible for the depletion of ozone.

(i) Give the general name for these compounds.

.....[1]

(ii) Explain, in terms of human health, why it is important that the ozone in the stratosphere does not become too depleted.

.....

.....[2]

(b) In the stratosphere, ozone, O_3 , is broken down to oxygen by photochemical reactions.

(i) What is meant by the term *photochemical reaction*?

.....

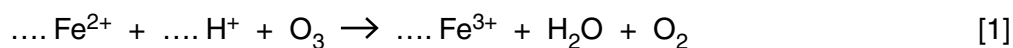
.....[1]

(ii) Construct an equation for the breakdown of ozone molecules to oxygen molecules.

.....[1]

(c) Ozone oxidises Fe^{2+} ions to Fe^{3+} ions.

Complete the ionic equation for this reaction.



[Total: 6]

A4 Copper is a metal.

(a) Draw a labelled diagram to show the bonding in copper.

[2]

(b) Explain why metals are malleable.

.....
.....
.....[2]

(c) Copper corrodes slowly in damp air.

One of the corrosion products has the formula $\text{CuCO}_3 \cdot \text{Cu}(\text{OH})_2$.

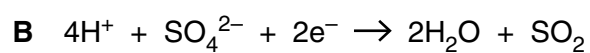

(i) Calculate the percentage by mass of copper in this compound.

[2]

(ii) How could you show that $\text{CuCO}_3 \cdot \text{Cu}(\text{OH})_2$ contains carbonate ions?

.....
.....
.....[2]

- (d) Copper is oxidised by concentrated sulfuric acid.
This redox reaction can be represented by equations **A** and **B**.

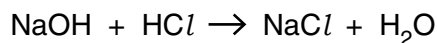


Which reaction, **A** or **B**, is oxidation and which is reduction? Explain your answer.

.....
.....
.....[2]

[Total: 10]

A6 When 1 mole of sodium hydroxide reacts with excess hydrochloric acid, 57.1 kJ of energy is released.



(a) Calculate the energy released when 12.0g of sodium hydroxide reacts with excess hydrochloric acid.

[2]

(b) Calculate the volume of 0.200 mol/dm³ HCl which contains 2.19 g of HCl.

[2]

(c) Aqueous hydrochloric acid contains chloride ions.

Describe a test for chloride ions.

test

result [2]

(d) Zinc oxide reacts with both hydrochloric acid and sodium hydroxide.

Which term describes this behaviour of zinc oxide?

..... [1]

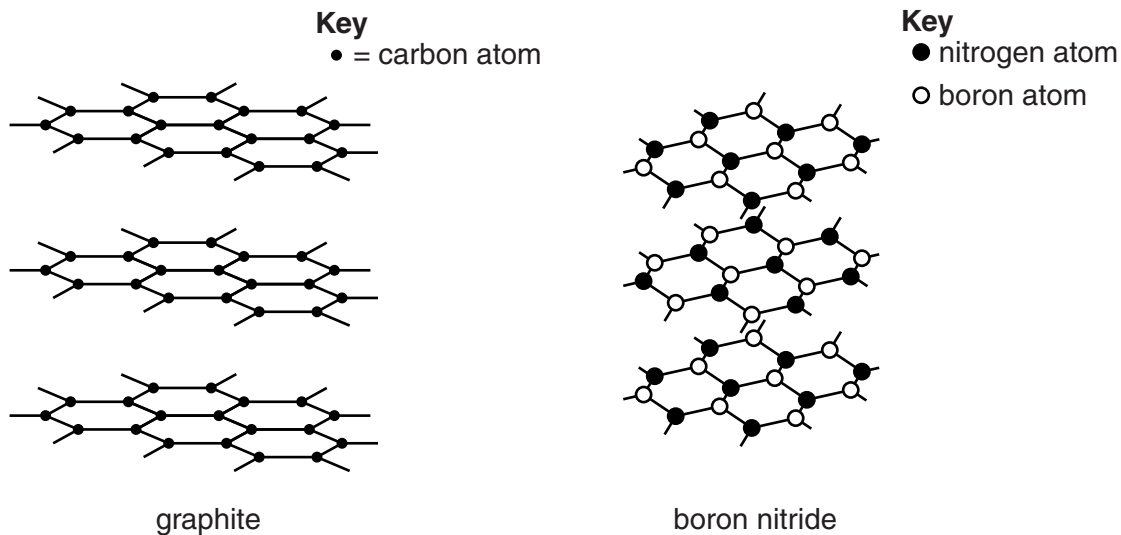
[Total: 7]

Section B

Answer **three** questions from this section in the spaces provided.

The total mark for this section is 30.

B7 The structures of graphite and boron nitride are shown below.



(a) Like graphite, boron nitride feels slippery to the touch.

Explain, in terms of structure and bonding, why boron nitride feels slippery to the touch.

.....

.....

.....[2]

(b) An isotope of boron is represented by the symbol ${}^{11}_5\text{B}$.

Deduce the number of protons and neutrons in this isotope of boron.

number of protons

number of neutrons[1]

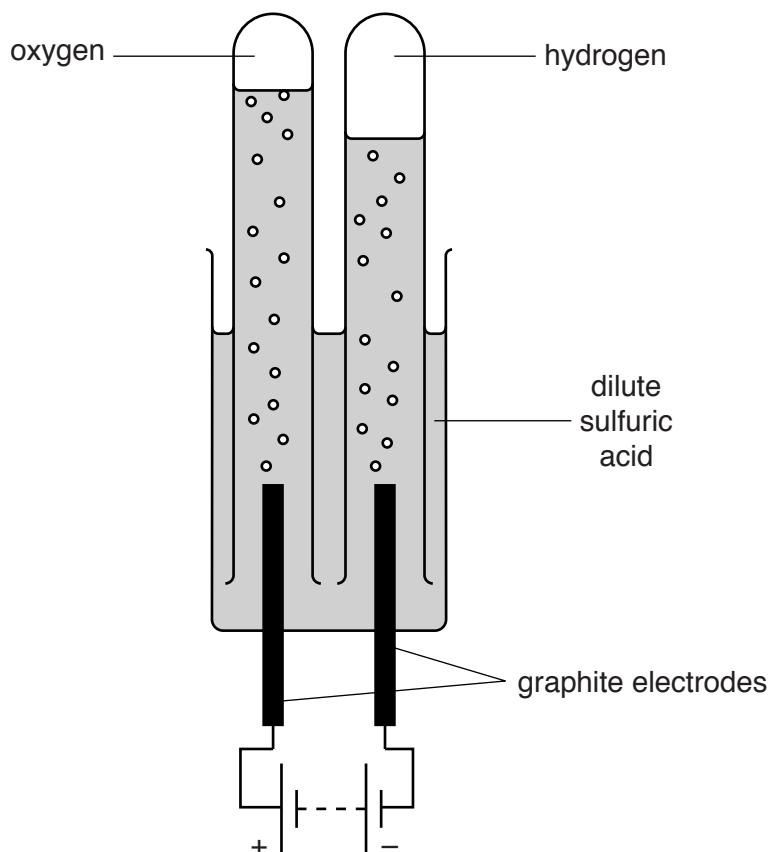
(c) Explain why graphite has a high melting point.

.....

.....

.....[2]

(d) Dilute sulfuric acid can be electrolysed using graphite electrodes.



(i) Graphite is a good electrical conductor.

Explain why graphite conducts electricity.

.....[1]

(ii) Give another property of graphite that makes it useful as an electrode in this electrolysis.

.....[1]

(e) During the electrolysis of dilute sulfuric acid, oxygen is released at the anode (positive electrode) and hydrogen is released at the cathode (negative electrode).

(i) Complete the equation for the reaction at the anode.



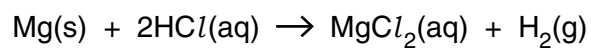
(ii) Construct the equation for the reaction at the cathode.

.....[1]

(iii) Explain why the volume of hydrogen produced is approximately double that of the oxygen.

.....
[1]

B8 A sample of 0.030g of small pieces of magnesium is added to 20cm³ of 0.10mol/dm³ hydrochloric acid.



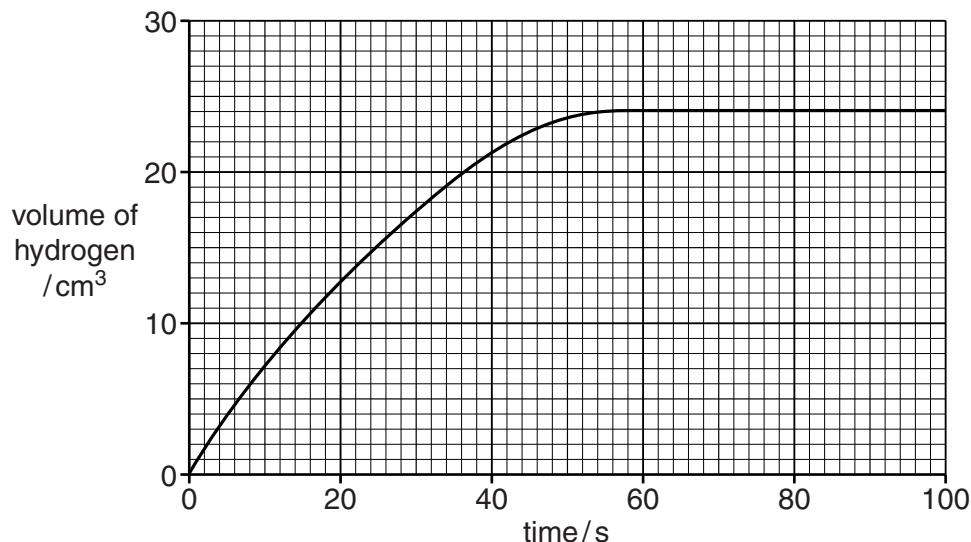
(a) (i) Show by calculation which reactant is in excess.

[3]

(ii) What would you observe in this reaction?

.....[1]

- (b) The graph shows how the volume of hydrogen gas produced, at room temperature and pressure, changes with time.



Calculate the total mass of hydrogen formed.

mass of hydrogen = g [2]

- (c) The experiment is repeated at the same temperature and pressure. The same mass of magnesium is added but magnesium powder is used instead of small pieces.

The rate of reaction is faster. Explain why.

.....

 [2]

- (d) Magnesium reacts with nitrogen when heated. The ionic compound magnesium nitride, Mg_3N_2 , is formed.

(i) Construct the equation, including state symbols, for this reaction.

..... [1]

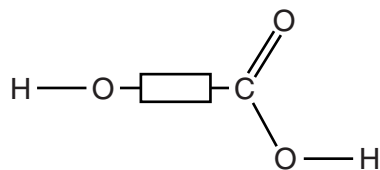
(ii) Deduce the charge on the nitride ion.

..... [1]

[Total: 10]

[Turn over

B9 The structure of glycolic acid can be represented as shown.



(a) Glycolic acid is a solid at room temperature.

Describe the arrangement and motion of the molecules in glycolic acid at room temperature.

arrangement

motion [2]

(b) Glycolic acid can polymerise with itself to form a polyester called poly(glycolic acid).

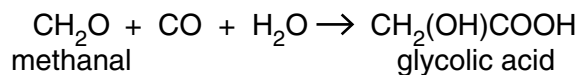
(i) What type of polymer is a polyester?

..... [1]

(ii) Draw a section of the polymer chain of poly(glycolic acid) showing at least two repeating units.

[2]

- (c) Glycolic acid is produced by heating methanal, carbon monoxide and water in the presence of a sulfuric acid catalyst.



- (i) A sample of 1800g of methanal reacts with excess carbon monoxide and water. The percentage yield of glycolic acid is 45%.

Calculate the mass, in grams, of glycolic acid produced.

mass of glycolic acid = g [3]

- (ii) Glycolic acid is a weak acid. Sulfuric acid is a strong acid.

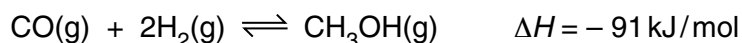
Explain the difference between a strong acid and a weak acid.

.....

 [2]

[Total: 10]

B10 Methanol is manufactured by reacting carbon monoxide with hydrogen. The forward reaction is exothermic.



- (a) Predict and explain the effect of increasing the pressure on the position of equilibrium. The temperature remains constant.

.....

 [2]

- (b) Predict and explain the effect of decreasing the temperature on the position of equilibrium. The pressure remains constant.

.....

 [2]

- (c) The rate of reaction decreases when the temperature is lowered.

Explain why.

.....

 [2]

- (d) The reaction is catalysed by copper.

- (i) Describe and explain the effect of a catalyst on this reaction.

.....

 [2]

- (ii) Copper is a transition element. Many transition elements are catalysts.

Give **two** other properties of copper that identify it as a transition element.

.....
 [2]

[Total: 10]

BLANK PAGE

Permission to reproduce items where third-party owned material protected by copyright is included has been sought and cleared where possible. Every reasonable effort has been made by the publisher (UCLES) to trace copyright holders, but if any items requiring clearance have unwittingly been included, the publisher will be pleased to make amends at the earliest possible opportunity.

To avoid the issue of disclosure of answer-related information to candidates, all copyright acknowledgements are reproduced online in the Cambridge International Examinations Copyright Acknowledgements Booklet. This is produced for each series of examinations and is freely available to download at www.cie.org.uk after the live examination series.

Cambridge International Examinations is part of the Cambridge Assessment Group. Cambridge Assessment is the brand name of University of Cambridge Local Examinations Syndicate (UCLES), which is itself a department of the University of Cambridge.

DATA SHEET The Periodic Table of the Elements

Group																	
I	II	III	IV	V	VI	VII	0										
		1 H Hydrogen 1					4 He Helium 2										
7 Li Lithium 3	9 Be Beryllium 4		11 B Boron 5	12 C Carbon 6	13 Al Aluminium 13	14 N Nitrogen 7	15 O Oxygen 8	16 F Fluorine 9	17 Ne Neon 10								
23 Na Sodium 11	24 Mg Magnesium 12		27 Al Aluminium 13	28 Si Silicon 14	29 Co Cobalt 27	30 Zn Zinc 30	31 P Phosphorus 15	32 S Sulfur 16	33 Cl Chlorine 17	34 Ar Argon 18							
39 K Potassium 19	40 Ca Calcium 20	45 Sc Scandium 21	48 Ti Titanium 22	51 V Vanadium 23	55 Mn Manganese 25	56 Fe Iron 26	59 Co Cobalt 27	59 Ni Nickel 28	64 Cu Copper 29	65 Zn Zinc 30	70 Ga Gallium 31	73 Ge Germanium 32	75 As Arsenic 33	76 Se Selenium 34	79 Br Bromine 35	80 Kr Krypton 36	
85 Rb Rubidium 37	88 Sr Strontium 38	89 Y Yttrium 39	91 Zr Zirconium 40	93 Nb Niobium 41	96 Mo Molybdenum 42	101 Ru Ruthenium 44	103 Rh Rhodium 45	106 Pd Palladium 46	108 Ag Silver 47	112 Cd Cadmium 48	115 In Indium 49	119 Sn Tin 50	122 Sb Antimony 51	128 Te Tellurium 52	127 I Iodine 53	131 Xe Xenon 54	
133 Cs Caesium 55	137 Ba Barium 56	139 La Lanthanum 57	178 Hf Hafnium 72	181 Ta Tantalum 73	184 W Tungsten 74	190 Os Osmium 76	192 Ir Iridium 77	195 Pt Platinum 78	197 Au Gold 79	201 Hg Mercury 80	204 Tl Thallium 81	207 Pb Lead 82	209 Bi Bismuth 83	210 Po Polonium 84	210 At Astatine 85	222 Rn Radon 86	
223 Fr Francium 87	226 Ra Radium 88	227 Ac Actinium 89															

140 Ce Cerium 58	141 Pr Praseodymium 59	144 Nd Neodymium 60	147 Pm Promethium 61	150 Sm Samarium 62	152 Eu Europium 63	157 Gd Gadolinium 64	159 Tb Terbium 65	162 Dy Dysprosium 66	165 Ho Holmium 67	167 Er Erbium 68	169 Tm Thulium 69	173 Yb Ytterbium 70	175 Lu Lutetium 71
232 Th Thorium 90	231 Pa Protactinium 91	238 U Uranium 92	237 Np Neptunium 93	244 Pu Plutonium 94	243 Am Americium 95	247 Cm Curium 96	247 Bk Berkelium 97	251 Cf Californium 98	252 Es Einsteinium 99	257 Fm Fermium 100	258 Md Mendelevium 101	259 No Nobelium 102	260 Lr Lawrencium 103

* 58–71 Lanthanoid series
† 90–103 Actinoid series

a X b

a = relative atomic mass
X = atomic symbol
b = atomic (proton) number

The volume of one mole of any gas is 24dm³ at room temperature and pressure (r.t.p.).